

• Candidates should be able to :

- State Boyle's law.

- Select and apply : $\frac{pV}{T} = \text{constant}$

- State the basic assumptions of the kinetic theory of gases.

- State that 1 mole of any substance contains 6.02×10^{23} particles and that $6.02 \times 10^{23} \text{ mol}^{-1}$ is the Avogadro constant, N_A .

- Select and solve problems using the Ideal gas equation expressed as :

$$pV = nRT \quad \text{and} \quad pV = NkT$$

Where N is the number of atoms and n is the number of moles.

- Explain that the mean translational kinetic energy of an atom of an ideal gas is directly proportional to the absolute gas temperature in Kelvin.

- Select and apply the equation : $E = \frac{3}{2} kT$

For the mean translational kinetic energy of atoms.

THE GAS LAWS

BOYLE'S LAW

This law, first discovered by Robert Boyle in 1662, relates the **PRESSURE** and **VOLUME** of a gas at **CONSTANT TEMPERATURE** and states that :

The **PRESSURE** (p) of a fixed mass of gas at constant temperature is **inversely proportional** to its **VOLUME** (V).

Stated mathematically :

$$p \propto 1/V$$

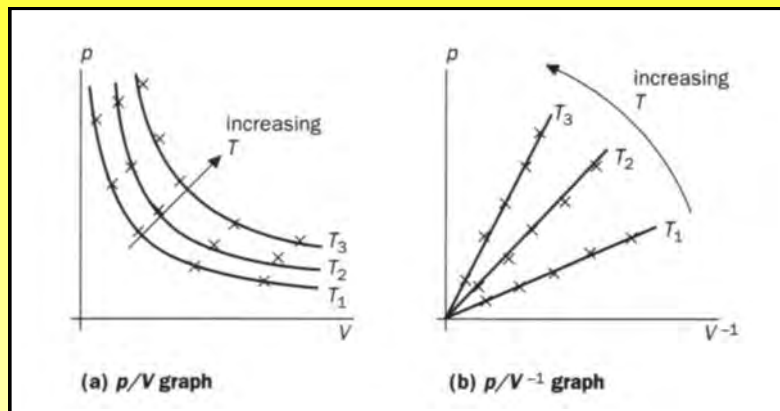
OR

$$pV = \text{constant}$$

- This equation can be used to calculate **pressure** or **volume** changes whenever a fixed mass of gas is either **compressed** into a smaller volume (at higher pressure) or allowed to **expand** into a larger volume (by reducing the pressure), providing the **temperature remains the same** throughout the change.
- So if (p_1) and (V_1) are the **pressure** and **volume** of a fixed mass of gas at some initial stage and (p_2) and (V_2) are the values after expansion or compression at **constant temperature**. Then :

$$p_1V_1 = p_2V_2$$

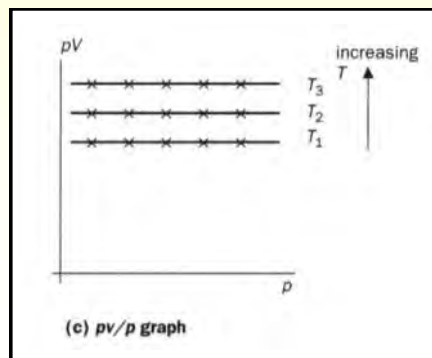
- A graphical representation of the relation between the **pressure (p)** and the **volume (V)** of a fixed mass of gas **at constant temperature** is shown below.



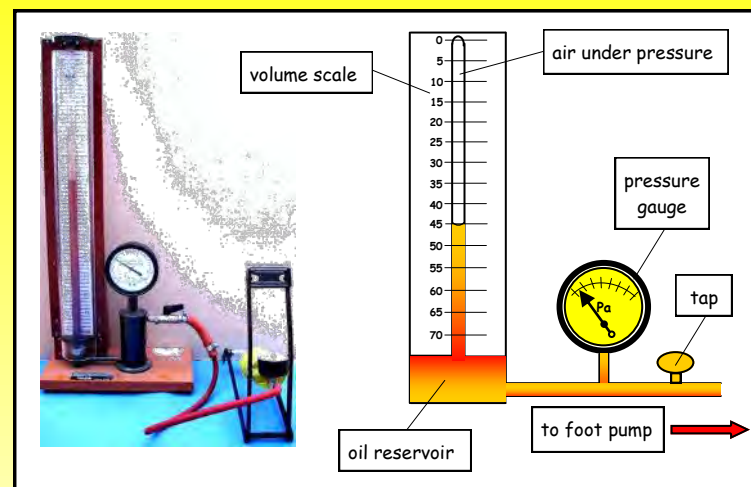
- When p is plotted against V , a curve called a **rectangular hyperbola** is obtained and when p is plotted against $1/V$, the result is a **straight-line** graph.

By investigating a fixed mass of gas at **different temperatures**, a series of graphs is obtained. Each of the curves or lines is called an **ISOTHERMAL** (since the plotted values are all for the same temperature).

- Plotting pV against p yields horizontal lines for each different temperature as shown in the diagram opposite.



PRACTICAL INVESTIGATION OF BOYLE'S LAW



- The apparatus shown above may be used to investigate the relation between the **pressure** and **volume** of a fixed mass of gas **at constant temperature**.
- A long glass tube which is closed at one end and mounted against a volume scale, contains the fixed mass of air under test. The pressure on the air column can be varied using a foot pump which forces oil from the reservoir up the tube and so compresses the air above it. The pressure gauge measures the pressure in pascal and the volume of the air column is read directly from the scale beneath the tube.
- The pump is first used to compress the air to its smallest possible volume and the tap is closed. In order to ensure that the oil level has stabilised and that the air is at room temperature, the **pressure (p)** and **volume (V)** readings are not taken for a couple of minutes. The apparatus is then slowly vented by opening the tap slightly and then closing it again. Once again the corresponding pressure and volume readings are taken after a short time has elapsed. This process is repeated several times so as to obtain a set of corresponding p and V values.

RESULTS

PRESSURE, $p/x 10^5 \text{ Pa}$	VOLUME, V/cm^3	$1/V/\text{cm}^{-3}$	pV/Nm

CALCULATIONS AND ANALYSIS

- Plot a graph of p against $1/V$. Is it a best-fit straight line? If so, what does this tell you about the relationship between p and $1/V$?
- Convert the volume readings to m^3 by multiplying by 10^{-6} and then calculate the product pV for each set of corresponding p and V values. Is the product pV approximately constant throughout?
- Has Boyle's law been verified by the results of the experiment?

CHARLES' LAW

This law relates the **VOLUME** (V) and the **TEMPERATURE** (T) of a gas at **CONSTANT PRESSURE** and states that :

The **VOLUME** (V) of a fixed mass of gas at constant pressure is **directly proportional** to its **ABSOLUTE (KELVIN) TEMPERATURE** (T).

Stated mathematically :

$$V \propto T$$

OR

$$\frac{V}{T} = \text{constant}$$

From which :

$$\frac{V_1}{T_1} = \frac{V_2}{T_2}$$

PRESSURE LAW

This law relates the **PRESSURE** (p) and the **TEMPERATURE** (T) of a gas at **CONSTANT VOLUME** and states that :

The **PRESSURE** (p) of a fixed mass of gas at constant volume is **directly proportional** to its **ABSOLUTE (KELVIN) TEMPERATURE** (T).

Stated mathematically :

$$p \propto T$$

OR

$$\frac{p}{T} = \text{constant}$$

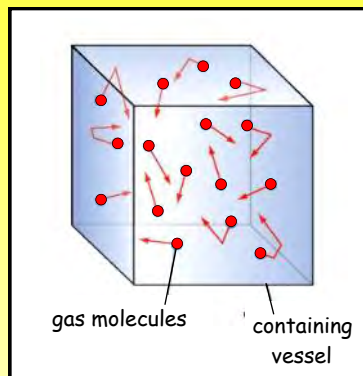
From which :

$$\frac{p_1}{T_1} = \frac{p_2}{T_2}$$

ASSUMPTIONS OF THE KINETIC THEORY OF GASES

- When we talk about the large-scale properties of a gas, such as **MASS, VOLUME, TEMPERATURE** and **PRESSURE**, we are dealing with a **MACROSCOPIC** description of the gas.

- The **MICROSCOPIC** description involves a gas model consisting of a large number of identical molecules in rapid, random motion, colliding with each other and with the walls of the containing vessel.



- The **KINETIC THEORY OF GASES** relates the **MICROSCOPIC** and **MACROSCOPIC** properties of a gas and is governed by the following basic assumptions:

- A gas consists of a large number of identical molecules in a state of rapid, random motion.
- The collisions between molecules and the walls of the containing vessel are **ELASTIC**.
- Other than those which occur during collisions, the forces between the molecules is zero.
- The gravitational force on the molecules is negligible.
- Compared to the volume of the containing vessel, the total volume of the molecules is negligible.

TERMS RELATING TO THE MICROSCOPIC MODEL OF GASES

AVOGADRO'S HYPOTHESIS states that *equal volumes of gases at the same temperature and pressure contain equal numbers of molecules.*

The **AVOGADRO CONSTANT** or **NUMBER** (N_A) is the number of atoms in 12 g of carbon-12.

N_A is the number of atoms per **MOLE*** of gas = 6.02×10^{23}

* **1 MOLE** is the amount of a substance that contains 6.02×10^{23} particles (i.e. atoms or molecules).

The **MOLARITY** (in mol) of a substance is the **NUMBER OF MOLES** contained in a certain amount of the substance.

The **MOLAR MASS** (M_m) (in kg mol^{-1} or g mol^{-1}) of a substance is the **MASS PER MOLE** of the substance.
(e.g. M_m of oxygen gas = $0.032 \text{ kg mol}^{-1}$ or 32 g mol^{-1}).

To calculate the **NUMBER OF MOLES** (n) in **MASS(M)** of gas of **MOLAR MASS** (M_m) we use:

$$n = M/M_m$$

To calculate the **NUMBER OF MOLECULES** (N) in n **MOLES** of gas we use:

$$N = n N_A = \frac{M}{M_m} N_A$$

THE IDEAL GAS EQUATION

- An **IDEAL GAS** is one which obeys the **GAS LAWS** exactly and for which is subject to the assumptions of the **KINETIC THEORY OF GASES**.
- So for a ideal gas each of the following applies :
 - $pV = \text{constant}$ (at constant temperature)
 - $V/T = \text{constant}$ (at constant pressure)
 - $p/T = \text{constant}$ (at constant volume)

From which we have that :

$$\frac{pV}{T} = \text{constant}$$

The magnitude of the constant depends on the mass of gas being considered.

For 1 **MOLE** of gas, the constant is the **UNIVERSAL MOLAR GAS CONSTANT (R) = 8.31 J mol⁻¹ K⁻¹**.

So for 1 **MOLE** of gas : $\frac{pV}{T} = R$

So : $pV = RT$

For **n MOLES** of gas :

$$pV = nRT$$

(Pa) (mol) (K) (m³) (J mol⁻¹ K⁻¹)

This is known as **THE IDEAL GAS EQUATION**.

- The ideal gas equation may also be expressed in terms of the **BOLTZMANN CONSTANT (k)** which is the **gas constant per molecule (i.e. $k = R/N_A$)**.

$$k = 1.38 \times 10^{-23} \text{ J kg}^{-1}$$

Since $k = R/N_A$, then $R = kN_A$

Substituting for R in $pV = nRT$ gives $pV = n(kN_A)T$

But $nN_A =$ number of moles \times number of molecules
of gas per mole

= number of molecules in the gas (N)

$$pV = NkT$$

(Pa) (m³) (K) (J kg⁻¹)

- This form of the ideal gas equation is useful for problems set in terms of molecules rather than moles of gas.

THE COMBINED GAS EQUATION

- For (n) moles of a gas of volume (V_1) at a pressure (p_1) and temperature (T_1) :

$$\frac{p_1 V_1}{T_1} = nR \dots\dots\dots(1)$$

- For the same amount of gas (n moles) whose volume has changed to (V_2) at a new pressure (p_2) and temperature (T_2) :

$$\frac{p_2 V_2}{T_2} = nR \dots\dots\dots(2)$$

From (1) and (2) we have that :

$$\frac{p_1 V_1}{T_1} = \frac{p_2 V_2}{T_2}$$

This is called the **COMBINED GAS EQUATION**.

- It is particularly useful for solving problems in which volume, pressure and temperature vary simultaneously.
- It does not matter what units are used for p and V , so long as they are the same on both sides of the equation, but T MUST BE IN KELVINS (K).

- A fixed mass of gas has a volume of 3000 cm^3 at a pressure of $1.0 \times 10^5 \text{ Pa}$. Calculate its **volume** when the pressure is increased to $2.5 \times 10^6 \text{ Pa}$ with the **temperature remaining constant**.
 - A fixed mass of gas has a volume V when the temperature is 127°C . To what **temperature** must the gas be raised so that its volume increases to $2.75 V$ with the **pressure remaining constant** ?
 - A fixed mass of gas has a volume of 0.02 m^3 at a pressure of $2.02 \times 10^5 \text{ Pa}$ and a temperature of 44°C . Calculate the new **volume** of the gas at standard temperature and pressure (i.e. 0°C And $1.01 \times 10^5 \text{ Pa}$).

- A diver swims at a depth of 40 m where the temperature of the water is 4.0°C . He inhales $1.2 \times 10^{-5} \text{ m}^3$ of compressed air at a pressure of $7.0 \times 10^5 \text{ Pa}$ and suddenly sees something that panics him into rising to the surface very rapidly without exhaling.

Calculate the **new volume** of the air which he inhaled at 40 m , if the surface temperature and pressure is 20.0°C and $1.01 \times 10^5 \text{ Pa}$ respectively.

- How many **moles** are there in 1.6 kg of oxygen if the molar mass of this gas is 32 g mol^{-1} ?
 - Calculate the **volume** occupied by 1 mole of an ideal gas at a temperature of 0°C and a pressure of $1.013 \times 10^5 \text{ Pa}$.

(The universal molar gas constant, $R = 8.31 \text{ J mol}^{-1} \text{ K}^{-1}$).

4 The molar mass of nitrogen is $0.028 \text{ kg mol}^{-1}$. A sample of the gas contains 6.02×10^{22} molecules.

(a) Calculate :

(i) The **number of moles** of gas contained in the sample.

(ii) The **mass** of the gas sample.

(iii) The **volume** occupied by the gas at a pressure of $1.01 \times 10^5 \text{ Pa}$ and a temperature of 17°C .

(The Avogadro number, $N_A = 6.02 \times 10^{23} \text{ mol}^{-1}$).

(b) A sample of a different gas contains 1.204×10^{25} molecules.

Calculate the **volume** occupied by this gas sample at a pressure of $2.02 \times 10^6 \text{ Pa}$ and a temperature of 100°C .

(The Boltzmann constant, $k = 1.38 \times 10^{-28} \text{ J kg}^{-1}$).

5 (a) Sketch a graph to show how the **pressure** of 2 moles of gas varies with **temperature** when the gas is heated from 20°C to 100°C in a sealed container of volume 0.050 m^3 .

(b) If the molar mass of the gas in (a) is $0.032 \text{ kg mol}^{-1}$, calculate the **density** of the gas.

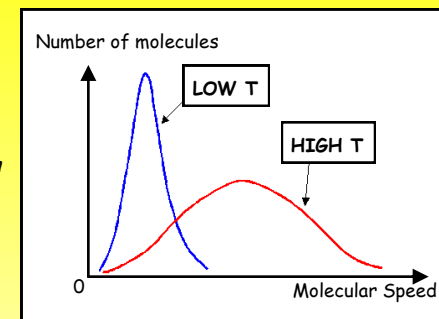
6 A vehicle air bag inflates rapidly when an impact causes the production and release of a large quantity of nitrogen in a chemical reaction. In a test of an air bag, the bag inflates to a volume of 1.2 m^3 and a pressure of 103 kPa at a final temperature of 280 K. Calculate : (a) The **number of moles** of gas in the bag.

(b) The **initial pressure** of the gas if it was released from a container of volume $5.6 \times 10^{-4} \text{ m}^3$ at the **same temperature**.

SPEED OF GAS MOLECULES

The molecules in a gas have a wide range of different speeds.

This is illustrated in the graph shown opposite in which **NUMBER OF MOLECULES** is plotted against **MOLECULAR SPEED**.



From the graph it can be seen that :

- Few molecules have either **very low** or **very high** speed and **none** have **zero speed** (i.e. are stationary).
- The distribution of gas molecular speed depends on **temperature**. As the gas temperature **increases**, the distribution curve becomes **flatter and broader**.

The **higher** the temperature, the **greater** is the proportion of **high-speed** molecules and the **smaller** is the proportion of **low-speed** molecules.

The **MEAN SPEED** (\bar{c}) is the average value of the speeds of **all** the molecules.

MOLECULAR KINETIC ENERGY AND TEMPERATURE

Since the mean speed (\bar{c}) of the molecules in a gas increases with temperature, the mean translational kinetic energy of the molecules must also increase with temperature.

The derivation which follows will establish that :

The mean translational kinetic energy of a molecule of an ideal gas is directly proportional to the absolute temperature of the gas.

The equation of state for (n) moles of an ideal gas of volume (V) at a pressure (p) and an absolute temperature (T) is :

$$pV = nRT \dots\dots\dots (1)$$

Using kinetic theory of gases, if the gas is made up of (N) molecules each of mass (m) and moving with a mean speed (\bar{c}) :

$$pV = \frac{1}{3} Nm\bar{c}^2 \dots\dots\dots (2)$$

Combining (1) and (2) gives :

$$\frac{1}{3} Nm\bar{c}^2 = nRT$$

Which may be expressed as :

$$\frac{2}{3} N(\frac{1}{2}m\bar{c}^2) = nRT$$

Therefore :
$$\frac{1}{2}m\bar{c}^2 = \frac{3 n RT}{2 N} = \frac{3}{2} \frac{R}{N/n} T$$

But $N/n =$ The number of gas molecules per mole = N_A .

AVOGADRO NUMBER

$$\frac{1}{2}m\bar{c}^2 = \frac{3}{2} \frac{R}{N_A} T \dots\dots\dots (3)$$

- R is the gas constant **per mole** of gas molecules.
- $R/N_A =$ The gas constant **per molecule**. = k

BOLTZMANN CONSTANT

$$E = \frac{3}{2} kT$$

(J) (J kg⁻¹) (K)

The **mean translational kinetic energy (E)** of a molecule of an ideal gas is directly proportional to the **absolute temperature (T)** of the gas.

NOTE

- From equation (3) : $\bar{c}^2 \propto T$
i.e. The **mean-square speed** of a gas molecule is directly proportional to the **absolute temperature**.
- Since the internal energy of an ideal gas is regarded as being purely kinetic :

The sum of the mean kinetic energies of all the molecules in a gas is the **internal energy** of the gas.

UNIT G484	Module 2	4.3.4	Ideal Gases	
<ul style="list-style-type: none"> PRACTICE QUESTIONS (2) 				9
<p>1 Given that the molar mass of nitrogen is $0.028 \text{ kg mol}^{-1}$ and that the Avogadro number (N_A) is $6.02 \times 10^{23} \text{ mol}^{-1}$, calculate :</p> <p>(a) The mass of a molecule of nitrogen.</p> <p>(b) The kinetic energy of a nitrogen molecule which is moving with a speed of 1500 m s^{-1}.</p>	(c) The total kinetic energy (i.e. the internal energy) of the gas contained in the cylinder. <ul style="list-style-type: none"> Molar mass of nitrogen $M_m = 0.028 \text{ kg mol}^{-1}$. Molar gas constant, $R = 8.31 \text{ J mol}^{-1} \text{ K}^{-1}$. Avogadro constant, $N_A = 6.02 \times 10^{23} \text{ mol}^{-1}$ 			
<ul style="list-style-type: none"> HOMEWORK QUESTIONS 				
<p>2 The mean translational kinetic energy of an oxygen molecule at 20°C is found to be $7.5 \times 10^{-21} \text{ J}$. Calculate :</p> <p>(a) The mean speed of an oxygen molecule.</p> <p>(b) The internal energy of 2.5 moles of oxygen gas at 20°C.</p> <p>(c) The mean translational kinetic energy of an oxygen molecule at a temperature of 200°C.</p> <ul style="list-style-type: none"> Molar mass of oxygen = $0.032 \text{ kg mol}^{-1}$. Avogadro number, $N_A = 6.02 \times 10^{23} \text{ mol}^{-1}$ 	<p>1 (a) State Boyle's law : (i) As a written statement.</p> <p>(ii) Expressed as a mathematical equation.</p> <p>(iii) Expressed in the form of a graph relating the quantities involved.</p> <p>(b) State the main assumptions of the kinetic theory of gases.</p> <p>(c) (i) Explain what is meant by an ideal gas.</p> <p>(ii) Write down the ideal gas equation for (n) moles of gas and state what each quantity in the equation is as well as giving its unit.</p> <p>(d) (i) Define the mole. How is the mole related to the Avogadro constant (N_A) ?</p> <p>(ii) What is the molar mass of a substance ?</p> <p>(iii) How many moles are there in (M) kg of a substance of molar mass (M_m) kg mol⁻¹?</p> <p>(e) How is the mean translational kinetic energy of a molecule of an ideal gas related to the gas temperature. Give a written statement and a relevant equation for this.</p>			
<p>3 A cylinder of volume 0.25 m^3 contains nitrogen gas at a pressure of $1.5 \times 10^5 \text{ Pa}$ and a temperature of 17°C. Assuming that the gas behaves ideally, calculate :</p> <p>(a) The number of moles of gas in the cylinder.</p> <p>(b) The mean translational kinetic energy of a nitrogen molecule.</p>	<p>(e) How is the mean translational kinetic energy of a molecule of an ideal gas related to the gas temperature. Give a written statement and a relevant equation for this.</p>			

(a) Explain what is meant by the **internal energy** of a gas. 10

(b) A bicycle tyre has a volume of $2.1 \times 10^{-3} \text{ m}^3$. On a day when the temperature is 15°C the pressure of the air in the tyre is **280 kPa**. Assume that the air behaves as an ideal gas.

(i) Calculate the **number of moles (n)** of air in the tyre.

(ii) The bicycle is ridden vigorously so that the tyres warm up. The pressure in the tyre rises to **290 kPa**. Calculate the **new temperature** of the air in the tyre. Assume that no air has leaked from the tyre and that the volume is constant.

(iii) Calculate, for the air in the tyre, the ratio :

$$\frac{\text{Internal energy at the higher temperature}}{\text{Internal energy at } 15^\circ\text{C}}$$

(OCR A2 Physics - Module 2824 - January 2007)

A light bulb contains $6.0 \times 10^{-5} \text{ m}^3$ of the inert gas, argon. The gas pressure in the bulb is **16 kPa** when the bulb is unlit and the gas temperature is 20°C . The molar mass of argon is **0.040 kg mol⁻¹** and the molar gas constant **R** is **8.31 J mol⁻¹ K⁻¹**.

(a) (i) Calculate the **number of moles** of argon gas in the bulb.

(ii) Calculate the **number of argon atoms** in the bulb. Argon consists of single atoms that do not combine with each other.

(iii) Calculate the **mean speed** of an argon atom if its kinetic energy at 20°C is $5.5 \times 10^{-21} \text{ J}$.

(b) The temperature of the gas in the bulb increases to a maximum of 120°C once it has been lit for some time. Calculate :

(i) The **gas pressure** at this new temperature.

(ii) The **new mean translational kinetic energy** of an argon atom at this temperature.

2 (a) The equation of state of an ideal gas is $pV = nRT$. Explain why the temperature must be measured in **Kelvin**.

(b) A meteorological balloon rises through the atmosphere until it expands to a volume of $1.0 \times 10^6 \text{ m}^3$, where the pressure is $1.0 \times 10^3 \text{ Pa}$. The temperature also falls from 17°C to -43°C .

- The pressure of the atmosphere at the Earth's surface = $1.0 \times 10^5 \text{ Pa}$.

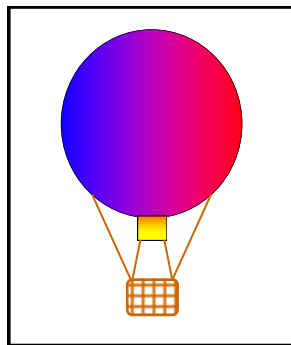
Show that the volume of the balloon at take off is about $1.3 \times 10^4 \text{ m}^3$.

(c) The balloon is filled with helium gas of molar mass $4.0 \times 10^{-3} \text{ kg mol}^{-1}$ at 17°C at a pressure of $1.0 \times 10^5 \text{ Pa}$. Calculate : (i) The number of moles of gas in the balloon.

(ii) The mass of gas in the balloon.

(d) The internal energy of the helium gas is equal to the random kinetic energy of all of its molecules. When the balloon is filled at ground level at a temperature of 17°C the internal energy is **1900 MJ**. Estimate the **internal energy** of the helium when the balloon has risen to a height where the temperature is -43°C .

(e) The upward force on the balloon at the Earth's surface is $1.3 \times 10^5 \text{ N}$. The initial acceleration of the balloon is 27 m s^{-2} and its total mass is **M**.



(i) On the diagram opposite **draw and label arrows** to represent the forces acting on the balloon immediately after take off.

(ii) Calculate the value of **M**.

(OCR A2 Physics - Module 2824 - June 2005)